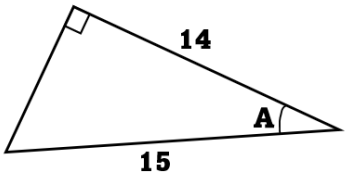
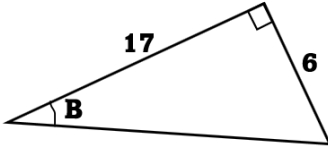
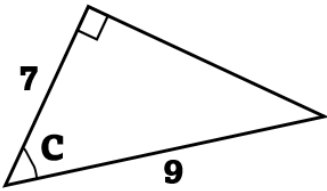
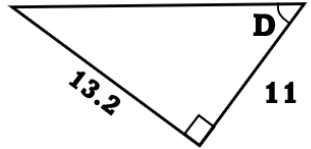
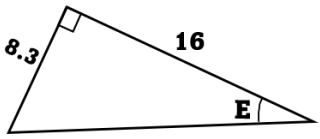
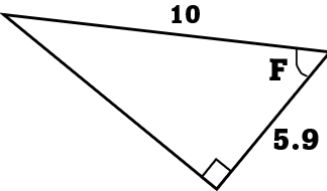
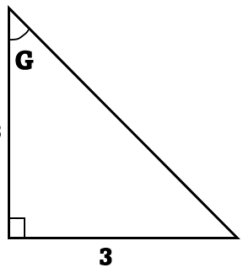
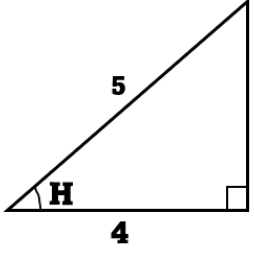
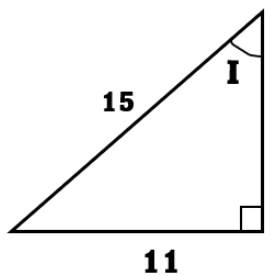
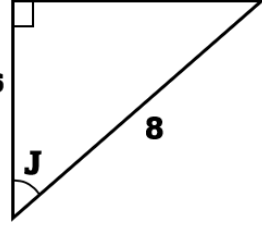
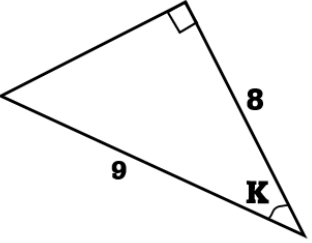


## ENCONTRANDO ÁNGULOS CON LAS FUNCIONES TRIGONOMÉTRICAS

### PRÁCTICA

**I PARTE.** Encuentre el valor de incógnita utilizando las funciones trigonométricas.

<b>1</b>		<b>2</b>		<b>3</b>	
<b>4</b>		<b>5</b>		<b>6</b>	
<b>7</b>		<b>8</b>		<b>9</b>	
<b>10</b>		<b>11</b>		<b>12</b>	