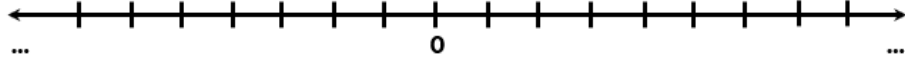


## GRÁFICA DE INTERVALOS

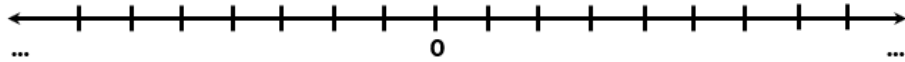
## PRÁCTICA

I. Grafique los siguientes intervalos.

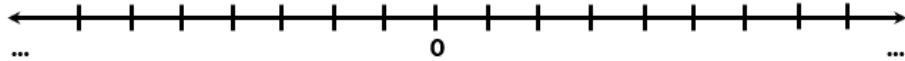
a)  $x < 6$



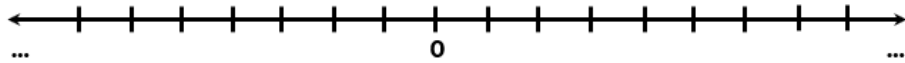
b)  $x \leq \frac{3}{4}$



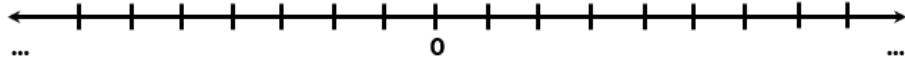
c)  $m > -5$



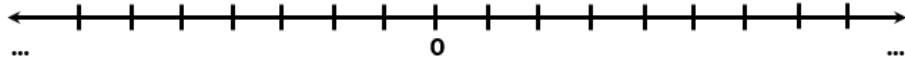
d)  $y \geq \frac{5}{8}$



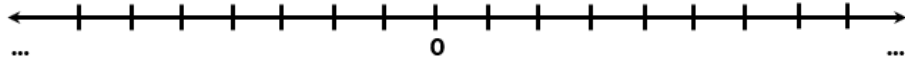
e)  $y \geq 7$



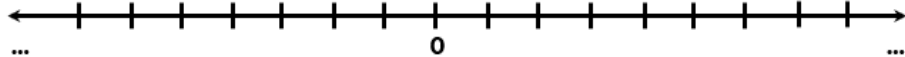
f)  $-3 \leq x < 4$



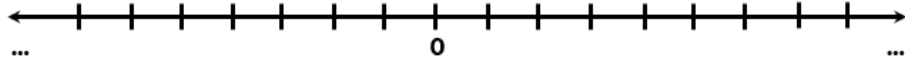
g)  $z \leq -3$



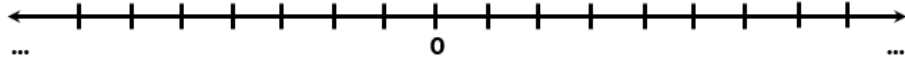
h)  $-1 \leq y \leq 4$



i)  $x < 0$



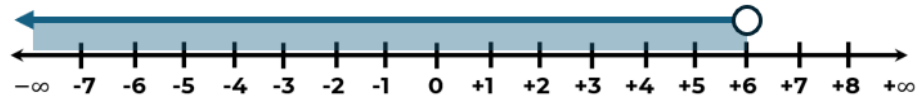
j)  $-5 < x < 0$



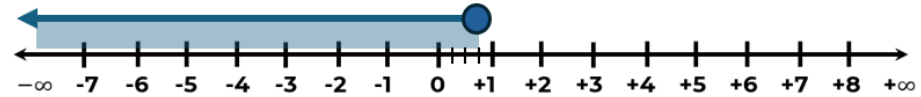
## Respuestas:

II. Grafique los siguientes intervalos.

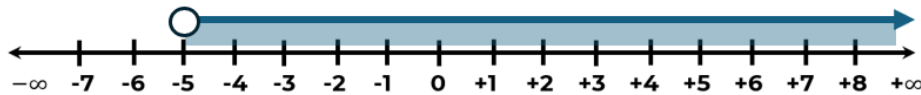
a)  $x < 6$



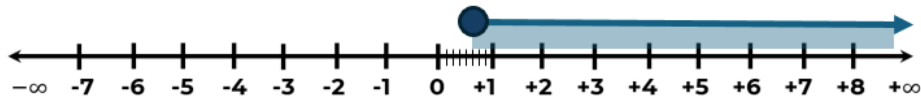
b)  $x \leq \frac{3}{4}$



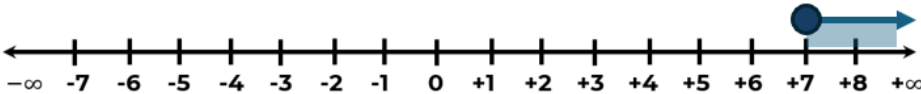
c)  $m > -5$



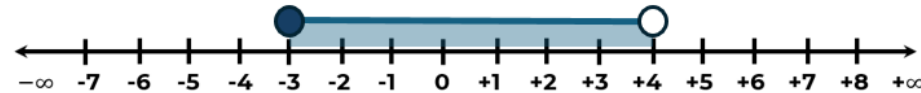
d)  $y \geq \frac{5}{8}$



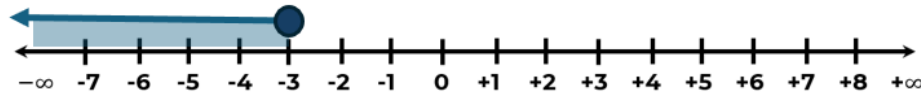
e)  $y \geq 7$



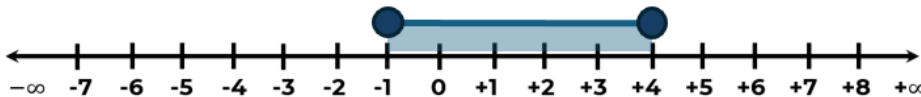
f)  $-3 \leq x < 4$



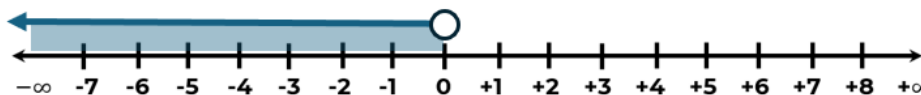
g)  $z \leq -3$



h)  $-1 \leq y \leq 4$



i)  $x < 0$



j)  $-5 < x < 0$

