

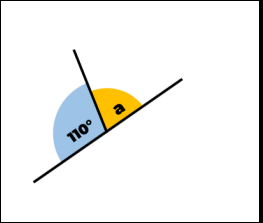
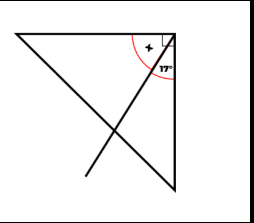
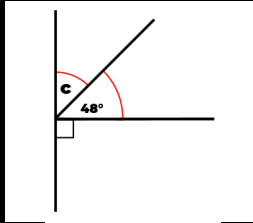
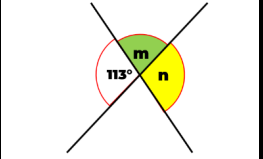
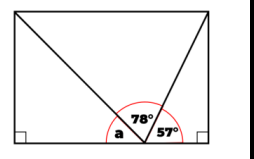
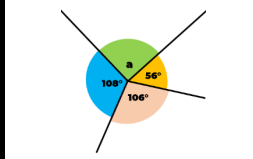
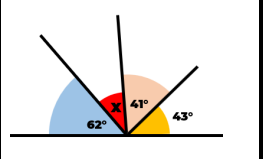
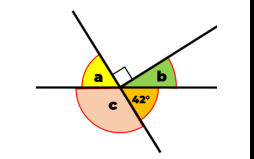
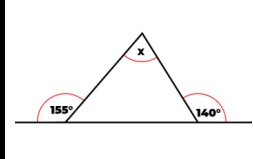
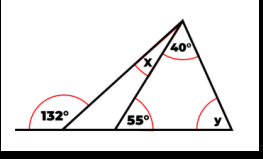
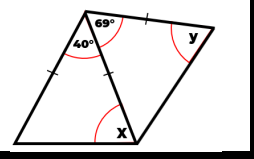
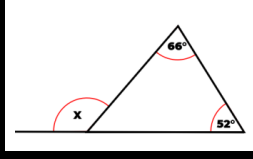
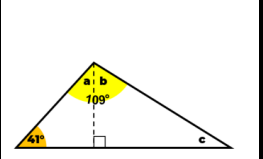

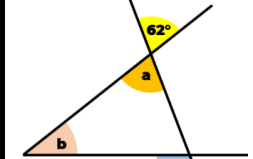
CONCEPTOS FUNDAMENTALES PARA ENCONTRAR ÁNGULOS

PRÁCTICA

I. Parte. Encuentre el valor del ángulo indicado.

1		2		3	6
4		5		9	12
7		8		15	
10		11			
13		14			

RESPUESTAS:

1		$a=70^\circ$	2		$x=73^\circ$	3		$c=42^\circ$
4		$m=67^\circ$ $n=113^\circ$	5		$a=45^\circ$	6		$a=90^\circ$
7		$x=34^\circ$	8		$a=42^\circ$ $b=48^\circ$ $c=138^\circ$	9		$x=115^\circ$
10		$x=7^\circ$ $y=85^\circ$	11		$x=70^\circ$ $y=55.5^\circ$	12		$x=118^\circ$
13		$a=49^\circ$ $b=60^\circ$ $c=30^\circ$	14		$a=54^\circ$	15		$a=62^\circ$ $b=69^\circ$